

Name \_\_\_\_\_

**Practice Test**  
5.OA.A.1  
*Write and interpret numerical expressions.*

1. Find the property that each equation shows. Write the equation in the correct box.

$15 \times (7 \times 9) = (15 \times 7) \times 9$	$23 + 4 + 109 = 4 + 23 + 109$	$87 \times 3 = 3 \times 87$	$0 + 16 = 16$
$13 + (3 + 7) = (13 + 3) + 7$	$1 \times 9 = 9$		

Identity Property of Addition $0 + 16 = 16$	Commutative Property of Multiplication $87 \times 3 = 3 \times 87$	Identity Property of Multiplication $1 \times 9 = 9$
Associative Property of Multiplication $15 \times (7 \times 9) = (15 \times 7) \times 9$	Commutative Property of Addition $23 + 4 + 109 = 4 + 23 + 109$	Associative Property of Addition $13 + (3 + 7) = (13 + 3) + 7$

2. For numbers 2a–2b, select the correct value for the expression.

2a. $55 - (12 + 2)$ , value: <span style="border: 1px solid black; padding: 2px 10px; display: inline-block;">39</span> <span style="border: 1px solid black; padding: 2px 10px; display: inline-block; border-radius: 50%;"><b>41</b></span> <span style="border: 1px solid black; padding: 2px 10px; display: inline-block;">43</span>	2b. $25 + (14 - 4) \div 5$ , value: <span style="border: 1px solid black; padding: 2px 10px; display: inline-block;">7</span> <span style="border: 1px solid black; padding: 2px 10px; display: inline-block; border-radius: 50%;"><b>27</b></span> <span style="border: 1px solid black; padding: 2px 10px; display: inline-block;">37</span>
--	--

3. Carmine buys 8 plates for \$1 each. He also buys 4 bowls. Each bowl costs twice as much as each plate. The store is having a sale that gives Carmine \$3 off the bowls. Which numerical expression shows how much he spent?

A  $8 + [(4 \times 16) - 3]$       B  $8 + [(4 \times 2) - 3]$   
 C  $8 + [4 \times (16 + 3)]$       D  $8 + [(4 \times 2) + 3]$

GO ON

Name \_\_\_\_\_

**Practice Test**

4. Valerie earns \$24 per hour. Which expression can be used to show how much money she earns in 7 hours?

A  $(7 + 20) + (7 + 4)$       B  $(7 \times 20) + (7 \times 4)$   
 C  $(7 + 20) \times (7 + 4)$       D  $(7 \times 20) \times (7 \times 4)$

5. Evaluate the numerical expression.

$2 + (65 + 7) \times 3 =$  **218**

6. Jackie followed these steps to evaluate the expression  $15 - (37 + 8) \div 3$ .

$37 + 8 = 45$   
 $45 - 15 = 30$   
 $30 \div 3 = 10$

Mark looks at Jackie's work and says she made a mistake. He says she should have divided by 3 before she subtracted.

**Part A**

Which student is correct? Explain how you know.

**Mark; Possible answer: According to the order of operations, you should perform division before subtraction.**

**Part B**

Evaluate the expression.

$37 + 8 = 45$     $45 \div 3 = 15$     $15 - 15 = 0$



**Practice Test**

5.OA.A.2

Write and interpret numerical expressions.

Name \_\_\_\_\_

1. An adult elephant eats about 300 pounds of food each day. Write an expression to represent the number of pounds of food a herd of 12 elephants eats in 5 days.

$$5 \times (300 \times 12)$$

2. Tara bought 2 bottles of juice a day for 15 days. On the 16th day, Tara bought 7 bottles of juice. Write an expression that matches the words.

$$(2 \times 15) + 7$$

3. Paul displays his sports trophies on shelves in his room. He has 5 trophies on each of 3 shelves and 2 trophies on another shelf. Write an expression to represent the number of trophies Paul displays.

$$(5 \times 3) + 2$$

4. Peter ran 3 miles a day for 17 days. On the 18th day, Peter ran 5 miles. Write an expression that matches the words.

$$(3 \times 17) + 5$$



3

Getting Ready for High-Stakes Assessments  
© Houghton Mifflin Harcourt Publishing Company

Practice Test

**Practice Test**

Name \_\_\_\_\_

5. Daniel bought 30 tokens when he arrived at the festival. He won 8 more tokens for getting the highest score at the basketball contest, but lost 6 tokens at the ring toss game. Write an expression to find the number of tokens Daniel has left.

$$30 + 8 - 6$$

6. Write  $12.9 + 8$  using words.

Possible answer: Add 8 to 12 and 9 tenths.

7. Write  $8 \div (7 - 5)$  using words.

Possible answer: 8 divided by the difference of 7 and 5

8. Which expressions represent multiplying the sum of 8 and 2 by 6? Mark all that apply.

- A  $8 + 2 \times 6$
- B  $(8 + 2) \times 6$
- C  $8 + (2 \times 6)$
- D  $6 \times (8 + 2)$
- E  $6 \times 8 + 2$



4

Getting Ready for High-Stakes Assessments  
© Houghton Mifflin Harcourt Publishing Company

Practice Test

Name \_\_\_\_\_

**Practice Test**  
5.OA.B.3  
*Analyze patterns and relationships.*

1. The table shows two sequences of numbers.

Day	1	2	3	4	5
<b>Number of T-shirts sold</b>	5	10	15	20	25
<b>Amount earned (\$)</b>	20	40	60	80	?

For numbers 1a–1b, choose the correct values to describe how one sequence is related to the other.

1a. The unknown number in Day 5 is 90  
100  
120.

1b. The rule that describes how the number of T-shirts sold relates to the amount earned is add 15  
multiply by 5  
multiply by 4.

2. Jawan made a table to figure out how much he earns at his job.

Job Earnings						
Week	1	2	3	4	...	6
<b>Hours Worked</b>	6	12	18	24	...	36
<b>Amount Earned (\$)</b>	54	108	162	216	...	?

**Part A**  
Write a rule that relates the amount Jawan earns to the number of hours worked. Explain how you can check your rule.

**Possible answer: The rule is multiply by 9. I can check by multiplying the number of hours worked each day by 9. The product will equal the amount earned in the table.**

**Part B**  
How much does he earn from his job by the end of Week 6?  
\$ 324

**GO ON**

Getting Ready for High-Stakes Assessments  
© Houghton Mifflin Harcourt Publishing Company

5

Practice Test

Name \_\_\_\_\_

**Practice Test**

3. Look for a pattern.

Figure 1

Figure 2

Figure 3

Figure 4

What is the rule? **add 2**  
How many squares will there be in Figure 5? **11** squares

4. Steven is buying a new mountain bike on layaway for \$272. If he pays \$34 each week, how many weeks will it take Steven to pay for the bike? How can making a table help you solve the problem?

**8 weeks; Possible explanation: I can make a table that shows how much Steven pays each week and the totals until I reach \$272.**

5. Look for a pattern.

Figure 1

Figure 2

Figure 3

Figure 4

What is the rule? **add 2**  
How many squares will there be in Figure 5? **13** squares

Getting Ready for High-Stakes Assessments  
© Houghton Mifflin Harcourt Publishing Company

6

Practice Test

Practice Test

5.NBT.A.1  
Understand the place value system.

Name \_\_\_\_\_

1. Which statements are correct? Mark all that apply.

- A 170 is  $\frac{1}{10}$  of 17
- B 660 is 10 times as much as 600
- C 900 is  $\frac{1}{10}$  of 9,000
- D 4,400 is 10 times as much as 440

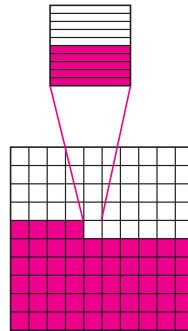
2. Carrie has 140 coins. She has 10 times as many coins as she had last month. How many coins did Carrie have last month?

14 \_\_\_\_\_

3. Select other ways to write 700,562. Mark all that apply.

- A  $(7 \times 100,000) + (5 \times 1,000) + (6 \times 10) + (2 \times 1)$
- B seven hundred thousand, five hundred sixty-two
- C  $700,000 + 500 + 60 + 2$
- D 7 hundred thousands + 5 hundreds + 62 tens

4. Shade the model to show the decimal 0.545.



GO ON

Getting Ready for High-Stakes Assessments  
© Houghton Mifflin Harcourt Publishing Company

7

Practice Test

Practice Test

Name \_\_\_\_\_

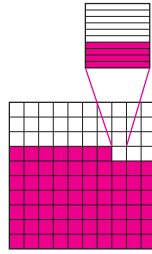
5. Select other ways to write 58.25. Mark all that apply.

- A  $(5 \times 10) + (8 \times 1) + (2 \times \frac{1}{10}) + (5 \times \frac{1}{100})$
- B  $50 + 8 + \frac{2}{10} + \frac{5}{100}$
- C  $(5 \times 100) + (8 \times 10) + (2 \times \frac{1}{10}) + (5 \times \frac{1}{100})$
- D fifty-eight and twenty-five hundredths

6. The value of the 8 in 8.4 is 100 times greater than the 8 in

- A 0.084
- B 0.84
- C 8.4
- D 84

7. Shade the model to show the decimal 0.674.



8. 0.92 is 10 times as much as

- A 0.0092
  - B 0.092
  - C 0.92
  - D 9.2
- and  $\frac{1}{10}$  of
- A 0.0092
  - B 0.092
  - C 0.92
  - D 9.2



Getting Ready for High-Stakes Assessments  
© Houghton Mifflin Harcourt Publishing Company

8

Practice Test

**Practice Test**  
5.NBT.A.2  
*Understand the place value system.*

Name \_\_\_\_\_

1. The table shows the equations Ms. Valez discussed in math class today.

Equations
$6 \times 10^0 = 6$
$6 \times 10^1 = 60$
$6 \times 10^2 = 600$
$6 \times 10^3 = 6,000$

Explain the pattern of zeros in the product when multiplying by powers of 10.

**Possible explanation: For each power of ten, the number of zeros written after the base is the same as the number in the exponent.**

2. Omar is making a scale model of the Statue of Liberty for a report on New York City. The Statue of Liberty is 305 feet tall measuring from the ground to the tip of the torch. If the model is  $\frac{1}{100}$  the actual size of the Statue of Liberty, how tall is the model?  
**3.05** feet

3. Which equation shows a correct product?

A  $0.62 \times 10 = 62$

B  $0.53 \times 10 = 53$

C  $0.09 \times 100 = 9$

D  $0.60 \times 1,000 = 60$

**GO ON**

**Practice Test**

Name \_\_\_\_\_

4. Nicole is making 1,000 bows for people who donate to the library book sale. She needs a piece of ribbon that is 0.75 meter long for each bow. How many meters of ribbon does Nicole need to make the bows? Explain how to find the answer.

**750 meters; Possible explanation: Multiply 1,000 by 0.75 by moving the decimal point 3 places to the right.**

5. Rita is hiking along a trail that is 13.7 miles long. So far she has hiked along one-tenth of the trail. How far has Rita hiked?  
**1.37** miles

6. Use the numbers on the tiles to write the value of each expression. You can use a tile more than once or not at all.

$35.5 \div 10^0$	=	<input type="text" value="35.5"/>
$35.5 \div 10$	=	<input type="text" value="3.55"/>
$35.5 \div 10^2$	=	<input type="text" value="0.355"/>

7. Select other ways to express  $10^4$ . Mark all that apply.

A  $10 \times 4$

B  $10 + 4$

C 1,000

D 10,000

E  $10 + 10 + 10 + 10$

F  $10 \times 10 \times 10 \times 10$

**STOP**

Practice Test

5.NBT.A.3a  
Understand the place value system.

Name \_\_\_\_\_

1. What is the value of the underlined digit? Mark all that apply.

0.679

- A 0.6  
 B 0.06  
 C six tenths  
 D six hundredths  
 E  $6 \times \frac{1}{10}$

2. Choose the value that makes the statement true.

In the number 1.025, the value of the digit 2 is

ones	tenths	hundredths	thousandths
		<u>hundredths</u>	

ones	tenths	hundredths	<u>thousandths</u>

2 \_\_\_\_\_, and the value of the digit 5 is

3. What is the value of the underlined digit? Mark all that apply.

0.589

- A 0.8  
 B 0.08  
 C eight tenths  
 D eight hundredths  
 E  $8 \times \frac{1}{10}$

4. What is the value of the underlined digit? Mark all that apply.

0.283

- A 0.8  
 B  $8 \times \frac{1}{100}$   
 C  $8 \times \frac{1}{10}$   
 D eight tenths  
 E eight hundredths



Practice Test

Name \_\_\_\_\_

5. Choose the value that makes the statement true.

<u>ones</u>	tenths	hundredths	thousandths

In the number 2.175, the value of the digit 2 is 2 \_\_\_\_\_, and

ones	tenths	<u>hundredths</u>	thousandths

the value of the digit 7 is 7 \_\_\_\_\_.

6. Write 9.57 in word form.

**nine and fifty-seven hundredths**

7. Jon is not sure how to write 81.402 in expanded form using powers of ten. Copy and complete the expanded form of the number.

$$\left(8 \times \underline{10}\right) + (1 \times 1) + \left(4 \times \underline{\frac{1}{10}}\right) + \left(2 \times \underline{\frac{1}{1,000}}\right)$$

8. Write  $(2 \times 100) + (9 \times 1) + \left(7 \times \frac{1}{10}\right) + \left(8 \times \frac{1}{1,000}\right)$  in standard form.

**209.708**



Name \_\_\_\_\_

**Practice Test**  
5.NBT.A.3b  
*Understand the place value system.*

1. Chaz kept a record of how many gallons of gas he purchased each day last week.

Day	Gas (in gallons)
Monday	4.5
Tuesday	3.9
Wednesday	4.258
Thursday	3.75
Friday	4.256

Order the days from least amount of gas Chaz purchased to greatest amount of gas Chaz purchased.

Thursday
Tuesday
Friday
Wednesday
Monday

Least

Greatest

2. For numbers 2a–2c, choose the symbol that makes the comparison true.

2a. sixteen hundredths > < = 0.020

2b.  $3 \times \frac{1}{10} + 4 \times \frac{1}{100} + 8 \times \frac{1}{1,000}$  > < = one and two tenths

2c. 3.067 > < =  $3 \times 1 + 6 \times \frac{1}{10} + 4 \times \frac{1}{1,000}$

**GO ON**

Getting Ready for High-Stakes Assessments  
© Houghton Mifflin Harcourt Publishing Company

13

Practice Test

Name \_\_\_\_\_

**Practice Test**

3. Jasmine kept a record of how many miles she ran each week during one month.

Week	Distance (in miles)
Week 1	4.754
Week 2	4.752
Week 3	5.19
Week 4	5.75

Order the weeks from the fewest number of miles Jasmine ran to the greatest number of miles Jasmine ran.

Week 2
Week 1
Week 3
Week 4

Least

Greatest

4. The four highest scores at a diving meet were 9.08, 9.1, 9.15, and 9.06 points. Choose the numbers that make the statement true.

The lowest of these four scores was 9.08 9.1 9.15 9.06 points.

The highest of these four scores was 9.08 9.1 9.15 9.06 points.

5. In which number is the value of the digit 5 greater? Write the number in the box.

3.514

25

25

25

**STOP**

Getting Ready for High-Stakes Assessments  
© Houghton Mifflin Harcourt Publishing Company

14

Practice Test

**Practice Test**

**5.NBT.A.4**  
Understand the place value system.

Name \_\_\_\_\_

- Which statements are correct? Mark all that apply.
  - 16.437 rounded to the nearest whole number is 16.
  - 16.437 rounded to the nearest tenth is 16.4.
  - 16.437 rounded to the nearest hundredth is 16.43.
- Rafael bought 2.15 pounds of potato salad and 4.25 pounds of macaroni salad to bring to a picnic. Which statement is correct?
  - Rounded to the nearest whole number, Rafael bought 2 pounds of potato salad.
  - Rounded to the nearest whole number, Rafael bought 5 pounds of macaroni salad.
  - Rounded to the nearest tenth, Rafael bought 2.1 pounds of potato salad.
  - Rounded to the nearest tenth, Rafael bought 4.2 pounds of potato salad.

- Michelle records the value of one Euro in U.S. dollars each day for her social studies project. The table shows the data she has recorded so far.

Day	Value of 1 Euro (in U.S. dollars)
Monday	1.448
Tuesday	1.443
Wednesday	1.452
Thursday	1.458

On which two days was the value of 1 Euro the same when rounded to the nearest hundredth of a dollar?

**Monday and Wednesday**



**Practice Test**

Name \_\_\_\_\_

- The price of a certain brand of cereal at the grocery store is \$0.258 per ounce. Which statements are true? Mark all that apply.
  - Rounded to the nearest whole number, the price is \$1 per ounce.
  - Rounded to the nearest tenth, the price is \$0.3 per ounce.
  - Rounded to the nearest hundredth, the price is \$0.26 per ounce.
  - Rounded to the nearest hundredth, the price is \$0.30 per ounce.
- Which statements are true? Mark all that apply.
  - 1.682 inches rounded to the nearest whole number is 1 inch.
  - 1.682 inches rounded to the nearest whole number is 2 inches.
  - 1.682 inches rounded to the nearest tenth is 1.6 inches.
  - 1.682 inches rounded to the nearest hundredth is 1.68 inches.

- Trudy is going to London next summer. Each week, she records the value of one British pound in U.S. dollars. The table shows the data she has recorded so far.

Week	Value of 1 British Pound (in U.S. dollars)
1	1.598
2	1.616
3	1.634
4	1.623


For which two weeks was the value of 1 British pound the same when rounded to the nearest hundredth of a dollar?


**Weeks 2 and 4**





Name \_\_\_\_\_

**Practice Test**  
  
**5.NBT.B.5**  
*Perform operations with multi-digit whole numbers and with decimals to hundredths.*

**GO ON** 

1. It is 3,452 feet round trip to Craig's school. If he went to school 179 times this year, how many feet did he travel in all?  
**617,908** feet

2. Solve. Show your work

$$\begin{array}{r} 4,193 \\ \times \quad 381 \\ \hline \end{array}$$

**1,597,533; Check students' work.**

3. Jeannette eats an average of 2,125 calories each day for a year. In a 365-day year, what is the total number of calories Jeanette eats?  
**775,625** calories

4. For numbers 4a–4c, fill in the number that completes the equation.

4a.  $1,205 \times 321 =$  **386,805**

4b.  $1,362 \times 409 =$  **557,058**

4c.  $1,181 \times 236 =$  **278,716**


Getting Ready for High-Stakes Assessments  
© Houghton Mifflin Harcourt Publishing Company

**17**

Practice Test

Name \_\_\_\_\_

**Practice Test**

**STOP** 

5. A large factory pays each new employee a salary of \$2,880 per month. The factory is hired to make a new product and needs to hire many new employees. Which statements are true? Mark all that apply.

A 100 new employees will earn a total of \$28,880 in a month.

B 111 new employees will earn a total of \$319,680 in a month.

C 150 new employees will earn a total of \$432,000 in a month.

D 175 new employees will earn a total of \$650,400 in a month.

6. It is 1,325 feet from Kinsey's house to her friend Carlito's house. When she visits Carlito, she walks to his house and gets a ride home from Carlito's mom. How many feet does Kinsey walk to Carlito's house in 112 visits?  
**148,400** feet

7. Solve. Show your work

$$\begin{array}{r} 2,996 \\ \times \quad 743 \\ \hline \end{array}$$

**2,226,028; Check students' work.**

8. A machine can seal 179 envelopes in 1 minute. If there are 1,440 minutes in a 24-hour day, how many envelopes can the machine seal in 1 day?  
**257,760** envelopes

Getting Ready for High-Stakes Assessments  
© Houghton Mifflin Harcourt Publishing Company

**18**

Practice Test

**Practice Test**

**5.NBT.B.6**  
*Perform operations with multi-digit whole numbers and with decimals to hundredths.*

Name \_\_\_\_\_

1. Jill wants to find the quotient. Use multiplication and the Distributive Property to help Jill find the quotient.

$144 \div 8 =$

Multiplication

Distributive Property

2. Choose the word that makes the sentence true.  
 The first digit in the quotient of  $1,875 \div 9$

will be in the \_\_\_\_\_ place.

ones
tens
hundreds
thousands

3. Dana is making a seating chart for an awards banquet. There are 184 people coming to the banquet. If 8 people can be seated at each table, how many tables will be needed for the awards banquet?
- tables

4. Which equation shows a correct quotient?

- $225 \div 9 = 25$   
  $154 \div 8 = 22$   
  $312 \div 9 = 39$   
  $412 \div 2 = 260$



**Practice Test**

Name \_\_\_\_\_

5. Write the letter for each quick picture under the division problem it represents.

**A**

$156 \div 12 = 13$

**B**

**B**

$168 \div 12 = 14$

**C**

**C**

$144 \div 12 = 12$

**A**

6. Divide 575 by 14 by using partial quotients. What is the quotient? Show your work.

**Possible work shown.**

$14 \overline{)575}$	$10 \times 14 = 140$	$10$
$\underline{-140}$	$10 \times 14 = 140$	$10$
$175$	$10 \times 14 = 140$	$10$
$\underline{-140}$	$10 \times 14 = 140$	$10$
$35$	$1 \times 14 = 14$	$1$
$\underline{-14}$	$1 \times 14 = 14$	$1$
$21$	$1 \times 14 = 14$	$1$
$\underline{-14}$	$1 \times 14 = 14$	$1$
$11$	$1 \times 14 = 14$	$1$
$\underline{-14}$	$1 \times 14 = 14$	$1$
$7$	$1 \times 14 = 14$	$1$
$\underline{-14}$	$1 \times 14 = 14$	$1$
$3$	$1 \times 14 = 14$	$1$
$\underline{-14}$	$1 \times 14 = 14$	$1$
$1$	$1 \times 14 = 14$	$1$
$\underline{-14}$	$1 \times 14 = 14$	$1$
$1$	$1 \times 14 = 14$	$1$
$\underline{-14}$	$1 \times 14 = 14$	$1$
$1$	$1 \times 14 = 14$	$1$
$\underline{-14}$	$1 \times 14 = 14$	$1$
$1$	$1 \times 14 = 14$	$1$
$\underline{-14}$	$1 \times 14 = 14$	$1$
$1$	$1 \times 14 = 14$	$1$
$\underline{-14}$	$1 \times 14 = 14$	$1$
$1$	$1 \times 14 = 14$	$1$
$\underline{-14}$	$1 \times 14 = 14$	$1$
$1$	$1 \times 14 = 14$	$1$
$\underline{-14}$	$1 \times 14 = 14$	$1$
$1$	$1 \times 14 = 14$	$1$
$\underline{-14}$	$1 \times 14 = 14$	$1$
$1$	$1 \times 14 = 14$	$1$
$\underline{-14}$	$1 \times 14 = 14$	$1$
$1$	$1 \times 14 = 14$	$1$
$\underline{-14}$	$1 \times 14 = 14$	$1$
$1$	$1 \times 14 = 14$	$1$
$\underline{-14}$	$1 \times 14 = 14$	$1$
$1$	$1 \times 14 = 14$	$1$
$\underline{-14}$	$1 \times 14 = 14$	$1$
$1$	$1 \times 14 = 14$	$1$
$\underline{-14}$	$1 \times 14 = 14$	$1$
$1$	$1 \times 14 = 14$	$1$
$\underline{-14}$	$1 \times 14 = 14$	$1$
$1$	$1 \times 14 = 14$	$1$
$\underline{-14}$	$1 \times 14 = 14$	$1$
$1$	$1 \times 14 = 14$	$1$
$\underline{-14}$	$1 \times 14 = 14$	$1$
$1$	$1 \times 14 = 14$	$1$
$\underline{-14}$	$1 \times 14 = 14$	$1$
$1$	$1 \times 14 = 14$	$1$
$\underline{-14}$	$1 \times 14 = 14$	$1$
$1$	$1 \times 14 = 14$	$1$
$\underline{-14}$	$1 \times 14 = 14$	$1$
$1$	$1 \times 14 = 14$	$1$
$\underline{-14}$	$1 \times 14 = 14$	$1$
$1$	$1 \times 14 = 14$	$1$
$\underline{-14}$	$1 \times 14 = 14$	$1$
$1$	$1 \times 14 = 14$	$1$
$\underline{-14}$	$1 \times 14 = 14$	$1$
$1$	$1 \times 14 = 14$	$1$
$\underline{-14}$	$1 \times 14 = 14$	$1$
$1$	$1 \times 14 = 14$	$1$
$\underline{-14}$	$1 \times 14 = 14$	$1$
$1$	$1 \times 14 = 14$	$1$
$\underline{-14}$	$1 \times 14 = 14$	$1$
$1$	$1 \times 14 = 14$	$1$
$\underline{-14}$	$1 \times 14 = 14$	$1$
$1$	$1 \times 14 = 14$	$1$
$\underline{-14}$	$1 \times 14 = 14$	$1$
$1$	$1 \times 14 = 14$	$1$
$\underline{-14}$	$1 \times 14 = 14$	$1$
$1$	$1 \times 14 = 14$	$1$
$\underline{-14}$	$1 \times 14 = 14$	$1$
$1$	$1 \times 14 = 14$	$1$
$\underline{-14}$	$1 \times 14 = 14$	$1$
$1$	$1 \times 14 = 14$	$1$
$\underline{-14}$	$1 \times 14 = 14$	$1$
$1$	$1 \times 14 = 14$	$1$
$\underline{-14}$	$1 \times 14 = 14$	$1$
$1$	$1 \times 14 = 14$	$1$
$\underline{-14}$	$1 \times 14 = 14$	$1$
$1$	$1 \times 14 = 14$	$1$
$\underline{-14}$	$1 \times 14 = 14$	$1$
$1$	$1 \times 14 = 14$	$1$
$\underline{-14}$	$1 \times 14 = 14$	$1$
$1$	$1 \times 14 = 14$	$1$
$\underline{-14}$	$1 \times 14 = 14$	$1$
$1$	$1 \times 14 = 14$	$1$
$\underline{-14}$	$1 \times 14 = 14$	$1$
$1$	$1 \times 14 = 14$	$1$
$\underline{-14}$	$1 \times 14 = 14$	$1$
$1$	$1 \times 14 = 14$	$1$
$\underline{-14}$	$1 \times 14 = 14$	$1$
$1$	$1 \times 14 = 14$	$1$
$\underline{-14}$	$1 \times 14 = 14$	$1$
$1$	$1 \times 14 = 14$	$1$
$\underline{-14}$	$1 \times 14 = 14$	$1$
$1$	$1 \times 14 = 14$	$1$
$\underline{-14}$	$1 \times 14 = 14$	$1$
$1$	$1 \times 14 = 14$	$1$
$\underline{-14}$	$1 \times 14 = 14$	$1$
$1$	$1 \times 14 = 14$	$1$
$\underline{-14}$	$1 \times 14 = 14$	$1$
$1$	$1 \times 14 = 14$	$1$
$\underline{-14}$	$1 \times 14 = 14$	$1$
$1$	$1 \times 14 = 14$	$1$
$\underline{-14}$	$1 \times 14 = 14$	$1$
$1$	$1 \times 14 = 14$	$1$
$\underline{-14}$	$1 \times 14 = 14$	$1$
$1$	$1 \times 14 = 14$	$1$
$\underline{-14}$	$1 \times 14 = 14$	$1$
$1$	$1 \times 14 = 14$	$1$
$\underline{-14}$	$1 \times 14 = 14$	$1$
$1$	$1 \times 14 = 14$	$1$
$\underline{-14}$	$1 \times 14 = 14$	$1$
$1$	$1 \times 14 = 14$	$1$
$\underline{-14}$	$1 \times 14 = 14$	$1$
$1$	$1 \times 14 = 14$	$1$
$\underline{-14}$	$1 \times 14 = 14$	$1$
$1$	$1 \times 14 = 14$	$1$
$\underline{-14}$	$1 \times 14 = 14$	$1$
$1$	$1 \times 14 = 14$	$1$

Name \_\_\_\_\_

**Practice Test**

**5.NBT.B.7**  
*Perform operations with multi-digit whole numbers and with decimals to hundredths.*

**STOP**

1. Clayton Road is 2.35 miles long. Wood Pike Road is 1.7 miles long. Kisha used a quick picture to find the combined length of Clayton Road and Wood Pike Road. Does Kisha's work make sense? Explain why or why not. Then find the correct length of the combined trails.

**Yes. Possible explanation: She regrouped the 10 tenths as 1 one and added the 1 to the whole numbers. The combined length of the 2 trails is 4.05 miles.**

2. A vet measured the mass of two birds. The mass of the robin was 76.64 grams. The mass of the blue jay was 81.54 grams. What was the difference in the masses of the birds?

4.9 \_\_\_\_\_ grams

3. Ken and Leah are trying to solve a science homework question. They need to find out how much a rock that weighs 4 pounds on Earth would weigh on Venus. They know they can multiply the amount the rock weighs on Earth by 0.91 to find its weight on Venus. Select the partial products Ken and Leah would need to add to find the product of 4 and 0.91. Mark all that apply.

A 0.95
 B 3.6
 C 3.65

D 0.04
 E 0.3-6

Getting Ready for High-Stakes Assessments  
© Houghton Mifflin Harcourt Publishing Company

**GO ON**

Practice Test

Name \_\_\_\_\_

**Practice Test**

**STOP**

4. Write each number in a box next to the expression that has the same value. A number may be used more than once.

8.99

89.9

899

$29 \times 3.1 =$  89.9  
 $0.29 \times 31 =$  8.99  
 $2.9 \times 31 =$  89.9

5. Melinda, Zachary, and Heather went to the mall to shop for school supplies. Melinda spent \$14.25 on her supplies. Zachary spent \$2.30 more than Melinda spent. Heather spent 2 times as much money as Zachary spent. How much did Heather spend on school supplies?

\$ 33.10

6. Draw a model to show  $5.5 \div 5$ .

$5.5 \div 5 =$  1.1

7. Emma, Brandy, and Damian will cut a rope that is 29.8 feet long into 4 jump ropes. Each of the 4 jump ropes will be the same length. Write a division sentence to find the length of each rope.

$29.8 \div 4 = 7.45$

Getting Ready for High-Stakes Assessments  
© Houghton Mifflin Harcourt Publishing Company

**STOP**

Practice Test

**Practice Test**

**5.NF.A.1**  
Use equivalent fractions as a strategy to add and subtract fractions.

Name \_\_\_\_\_

1. Write equivalent fractions for  $\frac{2}{3}$  and  $\frac{1}{3}$  that could be used to find the sum of the fractions.

**Possible answers:**

$\frac{6}{15}$  and  $\frac{5}{15}$

2. Jill brought  $2\frac{1}{3}$  boxes of carrot muffins for a bake sale. Mike brought  $1\frac{3}{4}$  boxes of apple muffins. What is the total number of boxes of muffins Jill and Mike brought to the bake sale?

$4\frac{1}{12}$  boxes of muffins

3. Joshua uses a rule to write the following sequence of numbers.

$\frac{1}{6}, \frac{1}{2}, \frac{5}{6}, \frac{2}{3}, 1, \frac{5}{6}, \frac{1}{2}$

What rule did Joshua use? **add  $\frac{1}{3}$**

What is the missing number in the sequence?  **$1\frac{1}{6}$**

4. For numbers 4a–4c, tell whether each expression was rewritten using the Commutative Property or the Associative Property. Choose the correct property of addition.

4a.  $\frac{1}{6} + (\frac{7}{8} + \frac{5}{6}) = \frac{1}{6} + (\frac{5}{6} + \frac{7}{8})$

4b.  $(\frac{7}{10} + \frac{1}{3}) + \frac{1}{10} = (\frac{1}{3} + \frac{7}{10}) + \frac{1}{10}$

4c.  $(\frac{6}{5} + \frac{4}{9}) + 3\frac{2}{9} = 6\frac{2}{5} + (\frac{4}{9} + 3\frac{2}{9})$

Associative Property  
**Commutative Property**

Associative Property  
**Commutative Property**

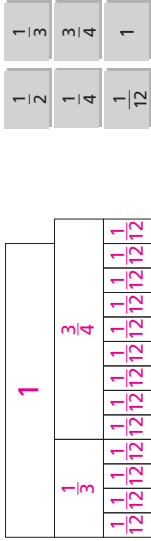
Associative Property  
Commutative Property

**GO ON** 

**Practice Test**

Name \_\_\_\_\_

5. Jeffrey walked  $\frac{1}{3}$  mile on Monday and jogged  $\frac{3}{4}$  mile on Tuesday. How far did he walk and jog on Monday and Tuesday combined? Use the tiles to complete the fraction strip model to show how you found your answer. The fractions may be used more than once or not at all.



$1\frac{1}{12}$  mile(s)

6. Each week, Tom exercises  $\frac{4}{9}$  hour on Mondays and  $\frac{5}{6}$  hour on Fridays.

**Part A**

Complete the calculations below to write equivalent fractions with a common denominator. **Possible answers given.**

$$\frac{4}{5} = \frac{4 \times 6}{5 \times 6} = \frac{24}{30}$$

$$\frac{5}{6} = \frac{5 \times 5}{6 \times 5} = \frac{25}{30}$$

**Part B**

How much time does Tom spend exercising on Monday and Friday each week? Explain how you found your answer.

**$1\frac{19}{30}$  hours; Possible answer: To find the total amount of time spent exercising, I added the numerators and kept the same denominator to find  $\frac{24}{30} + \frac{25}{30} = \frac{49}{30}$ . Then I regrouped  $\frac{30}{30}$  as 1, leaving  $\frac{19}{30}$  left over. I wrote the answer as  $1\frac{19}{30}$ .**

**Part C**

Last week, Tom spent  $\frac{1}{10}$  hour less time than normal exercising. How much time did Tom spend exercising last week? Explain.


**$1\frac{16}{30}$  hours; Possible answer: I changed  $\frac{1}{10}$  to  $\frac{3}{30}$ . I then subtracted  $\frac{3}{30}$  from the sum of the other 2 fractions.  $1\frac{19}{30} - \frac{3}{30} = 1\frac{16}{30}$ .**



Name \_\_\_\_\_

**Practice Test**  
5.NF.A.2  
*Use equivalent fractions as a strategy to add and subtract fractions.*

1. The shaded part of the diagram shows what portion of a full meter of string Genie has. She will use  $\frac{3}{5}$  meter of string to make bracelets. How much of the string will she have left after making the bracelets?



1 m

A  $\frac{1}{10}$  meter  
 B  $\frac{3}{10}$  meter  
 C  $\frac{3}{5}$  meter  
 D  $\frac{6}{5}$  meter

2. Sophia babysat for  $3\frac{7}{12}$  hours on Friday. She babysat for  $2\frac{5}{6}$  hours on Saturday. For numbers 2a–2c, estimate how long Sophia babysat on Friday and Saturday combined. Choose the correct benchmarks and sum.

2a. Sophia babysat for about

2
3
 $3\frac{1}{2}$ 
4

2b. Sophia babysat for about

1
2
 $2\frac{1}{2}$ 
3

2c. Sophia babysat for about

5
 $5\frac{1}{2}$ 
6
 $6\frac{1}{2}$

**Practice Test**

**GO ON**

Getting Ready for High-Stakes Assessments  
© Houghton Mifflin Harcourt Publishing Company

25

Practice Test

Name \_\_\_\_\_

**Practice Test**

3. Four students spent time volunteering last weekend. The table shows how much time each student spent volunteering.

Student	Time (in hours)
Amy	$4\frac{5}{6}$
Beth	$6\frac{1}{2}$
Victor	$5\frac{3}{4}$
Cal	$5\frac{2}{3}$

Match each pair of students with the difference between how much time they spent volunteering.

Amy and Victor  
 $\frac{3}{4}$  hour

Cal and Beth  
 $1\frac{1}{12}$  hour

Beth and Victor  
 $\frac{5}{6}$  hour

4. Rodrigo practiced playing the guitar  $15\frac{1}{3}$  hours over the past 3 weeks. He practiced for  $6\frac{1}{4}$  hours during the first week and  $4\frac{2}{3}$  hours during the second week. How much time did Rodrigo spend practicing during the third week? Use the numbers and symbols to write an equation that represents the problem. Then solve the equation. Symbols may be used more than once or not at all.

$15\frac{1}{3}$

$6\frac{1}{4}$

$4\frac{2}{3}$

x

=

+

**Possible answer:**  $15\frac{1}{3} = 6\frac{1}{4} + 4\frac{2}{3} + x$

Practice time during third week:  $4\frac{5}{12}$  hours

Getting Ready for High-Stakes Assessments  
© Houghton Mifflin Harcourt Publishing Company

26

Practice Test

Practice Test

Name \_\_\_\_\_

5. Steve is buying apples for the fifth grade. Each bag holds 12 apples. If there are 75 students total, how many bags of apples will Steve need to buy if he wants to give one apple to each student?

\_\_\_\_\_ bags

6. Russ and Vickie are trying to solve this problem: There are 146 students taking buses to the museum. If each bus holds 24 students, how many buses will they need?

Russ says the students need 6 buses. Vickie says they need 7 buses. Who is correct? Explain your reasoning.

**Vickie is correct. The answer to the problem is  $6\frac{2}{24}$ . This means that there are 6 full buses of students and 2 extra students; so, an extra bus is needed, making the total 7 buses.**

7. Seven friends picked 7 quarts of blueberries. Three of the friends will share 4 quarts of blueberries equally, and the other 4 friends will share 3 quarts of the blueberries equally. In which group does each friend get a greater amount of blueberries? Explain your reasoning.

**The group of 3 friends will get a greater amount of blueberries. Possible explanation:  $4 \div 3 = \frac{4}{3}$  and  $3 \div 4 = \frac{3}{4}$**

$$\frac{4}{3} = 1\frac{1}{3}$$

$$1\frac{1}{3} > \frac{3}{4}$$

8. Nine friends share 3 pumpkin pies equally. What fraction of a pumpkin pie does each friend get?

Each friend will get  $\frac{3}{9}$  or  $\frac{1}{3}$  of a pumpkin pie.

STOP

Getting Ready for High-Stakes Assessments 28  
© Houghton Mifflin Harcourt Publishing Company

Practice Test

5.NF.B.3  
*Apply and extend previous understandings of multiplication and division to multiply and divide fractions.*

Name \_\_\_\_\_

1. Samuel needs 233 feet of wood to build a fence. The wood comes in lengths of 11 feet.

**Part A**

How many total pieces of wood will Samuel need? Explain your answer.

**22 pieces; Possible explanation: I need to divide 233 by 11. The answer is  $21\frac{2}{11}$ . Since Samuel can't buy a partial piece of wood, I need to add 1 to the quotient. So, the final answer is 22.**

**Part B**

Theresa needs twice as many feet of wood as Samuel. How many pieces of wood does Theresa need? Explain your answer.

**43 pieces of wood; Possible explanation: Twice the length of 233 feet is 466 feet. If I divide 466 by 11, the answer is  $42\frac{4}{11}$ . Theresa needs to buy 43 pieces of wood.**

2. Twelve pounds of beans are distributed equally into 8 bags to give out at the food bank. How many pounds of beans are in each bag?

$\frac{3}{2}$  or  $1\frac{1}{2}$  pounds

3. Five friends share 3 bags of trail mix equally. What fraction of a bag of trail mix does each friend get?

**Each friend will receive  $\frac{3}{5}$  of a bag of trail mix.**

4. Zoe has 5 cucumbers she grew in her garden. She wants to share them equally among 4 of her neighbors. How many cucumbers will each neighbor receive? Use the numbers on the tiles to complete the number sentence. You may use a number more than once or not at all.

1	2	3	4	5	6
---	---	---	---	---	---

$$\boxed{5} \div \boxed{4} = \frac{\boxed{5}}{\boxed{4}} = \frac{\boxed{1}}{\boxed{4}}$$

GO ON

Getting Ready for High-Stakes Assessments 27  
© Houghton Mifflin Harcourt Publishing Company


Name \_\_\_\_\_

**Practice Test**

**5.NF.B.4a**  
*Apply and extend previous understandings of multiplication and division to multiply and divide fractions.*

**Practice Test**

1. Mrs. Williams is organizing her office supplies. There are 3 open boxes of paper clips in her desk drawer. Each box has  $\frac{7}{8}$  of the paper clips remaining. How many boxes of paper clips are left? Shade the model and complete the calculations below to show how you found your answer.




$3 \times \frac{7}{8} = \frac{21}{8} = 2\frac{5}{8}$

\_\_\_\_\_ full boxes of paper clips

2. Logan bought 15 balloons. Four-fifths of the balloons are purple. How many of the balloons are purple? Draw a model to show how you found your answer.

Possible answer:



\_\_\_\_\_ purple balloons

3. Taniqua took a test that had 20 multiple-choice questions and 10 True/False questions. She got  $\frac{9}{10}$  of the multiple-choice questions correct, and she got  $\frac{3}{5}$  of the True/False questions correct.

3a. How many multiple-choice questions did Taniqua get correct?  
\_\_\_\_\_ multiple-choice questions

3b. How many True/False questions did Taniqua get correct?  
\_\_\_\_\_ True/False questions

**GO ON**

Getting Ready for High-Stakes Assessments  
© Houghton Mifflin Harcourt Publishing Company

**29**

Practice Test

Name \_\_\_\_\_

**Practice Test**

**Practice Test**

4. Frannie put  $\frac{2}{3}$  of her music collection on an mp3 player. While on vacation, she listened to  $\frac{3}{5}$  of the music on the player. How much of Frannie's music collection did she listen to while on vacation? For numbers 4a–4d, choose the correct values to describe how to solve the problem.

4a. Draw a rectangular array with 3 rows and \_\_\_\_\_ columns.

1	2	3
---	---	---

Shade \_\_\_\_\_ of the rows gray.

4b. Shade \_\_\_\_\_ of the rows gray.

3	5	6
---	---	---

Shade \_\_\_\_\_ of the gray squares black.

4c. Shade \_\_\_\_\_ of the gray squares black.

2	5
3	5
3	10

Frannie listened to \_\_\_\_\_ of her music collection while on vacation.

4d. Frannie listened to \_\_\_\_\_ of her music collection while on vacation.

5. In a fifth grade class,  $\frac{4}{5}$  of the girls have brown hair. Of the brown-haired girls,  $\frac{3}{4}$  of them have long hair. Of the girls with long brown hair,  $\frac{1}{3}$  of them have green eyes.

**Part A**

What fraction of the girls in the class have long brown hair?  
 $\frac{3}{5}$  \_\_\_\_\_ of the girls

**Part B**

What fraction of the girls in the class have long brown hair and green eyes?  
 $\frac{1}{5}$  \_\_\_\_\_ of the girls

Getting Ready for High-Stakes Assessments  
© Houghton Mifflin Harcourt Publishing Company

**30**

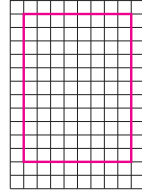
Practice Test

Name \_\_\_\_\_

5. Peggy is making a quilt using panels that are  $\frac{1}{2}$  foot by  $\frac{1}{2}$  foot. The quilt is  $5\frac{1}{2}$  feet long and 4 feet wide.

**Part A**

Let each square of the grid below represent  $\frac{1}{2}$  foot by  $\frac{1}{2}$  foot. Draw a rectangle on the grid to represent the quilt.



**Possible answer:**

**Part B**

What is the area of the quilt? Explain how you found your answer. \_\_\_\_\_ square feet

**Possible explanation:** There are 8 rows and 11 columns of squares, for a total of  $8 \times 11 = 88$  squares. Each square represents an area of  $\frac{1}{2} \times \frac{1}{2} = \frac{1}{4}$  square foot. So, the area of the quilt is  $88 \times \frac{1}{4} = 22$  square feet.

6. An area rug has an area of 48 square feet. Two similar rugs have areas of 108 square feet and 192 square feet. In each rug, the length is  $\frac{1}{3}$  times the width. Which of the following could be the dimensions of one of the area rugs? Mark all that apply.

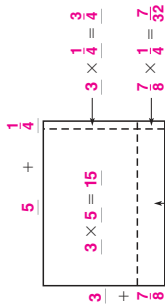

- A 6 feet by 8 feet
- B 10 feet by 18 feet
- C 9 feet by 12 feet
- D 12 feet by 16 feet
- E 4 feet by 12 feet



**5.NF.B.4b**  
Apply and extend previous understandings of multiplication and division to multiply and divide fractions.

Name \_\_\_\_\_

1. Caleb's family room has the dimensions shown. He needs to find the area of the room so that he knows how much carpet to buy. Complete the area model below to find the area of the family room.



area of the room =  $20\frac{11}{32}$  square yards

2. Louis wants to carpet the rectangular floor of his basement. The basement has an area of 864 square feet. The width of the basement is  $\frac{2}{3}$  its length. What is the length of Louis's basement? \_\_\_\_\_ feet
3. A postcard has an area of 24 square inches. Two enlargements of the postcard have areas of 54 square inches and 96 square inches. In each postcard, the length is  $1\frac{1}{2}$  times the width. Which of the following could be the dimensions of the postcard or one of the enlargements? Mark all that apply.


- A 6 inches by 9 inches
- B 10 inches by 15 inches
- C 8 inches by 12 inches
- D 6 inches by 12 inches
- E 4 inches by 6 inches


4. The Gilberts are designing a rectangular patio. The patio has an area of 432 square feet. The width of the patio is  $\frac{3}{4}$  its length. What is the length of the patio? \_\_\_\_\_ feet





Name \_\_\_\_\_

**Practice Test**  
  
**5.NF.B.5a**  
*Apply and extend previous understandings of multiplication and division to multiply and divide fractions.*

**GO ON** 

**1.** Diana worked on her science project for  $5\frac{1}{3}$  hours. Gabe worked on his science project  $1\frac{1}{4}$  times as long as Diana. Paula worked on her science project  $\frac{3}{4}$  times as long as Diana. Which statements are correct? Mark all that apply.

**A** Diana worked longer on her science project than Gabe worked on his science project.

**B** Paula worked less on her science project than Diana worked on her science project.

**C** Gabe worked longer on his science project than Paula worked on her science project.

**D** Gabe worked longer on his science project than Diana and Paula combined.

**2.** Write each multiplication expression in the correct box.

$\frac{4}{5} \times \frac{1}{8} \quad \frac{1}{3} \times \frac{4}{5} \quad 3 \times \frac{4}{5} \quad \frac{4}{4} \times \frac{4}{5} \quad \frac{4}{5} \times \frac{2}{2}$	$\frac{4}{8} \times \frac{4}{5} \times \frac{2}{2}$
Product is equal to $\frac{4}{5}$ . $8 \times \frac{4}{5} \times \frac{2}{2}$	Product is greater than $\frac{4}{5}$ . $5 \times 1 \frac{1}{8} \times \frac{4}{5}$
Product is less than $\frac{4}{5}$ . $1 \times \frac{4}{3} \times \frac{4}{5}$	Product is less than $\frac{4}{5}$ . $3 \times \frac{4}{5} \times 5$

**3.** Doreen lives  $\frac{3}{4}$  mile from the library. Sheila lives  $\frac{1}{3}$  as far away from the library as Doreen. Which statement is correct?

**A** Doreen lives farther from the library than Sheila.

**B** Sheila lives  $\frac{1}{3}$  mile from the library.

**C** Sheila lives twice as far from the library as Doreen.

**D** Sheila and Doreen live the same distance from the library.

Name \_\_\_\_\_

**Practice Test**

**4.** Write each multiplication expression in the correct box.

$\frac{5}{6} \times \frac{2}{3} \quad 2 \times \frac{5}{6} \quad \frac{5}{4} \times \frac{4}{6} \quad \frac{5}{10} \times \frac{7}{3} \quad \frac{5}{10} \times \frac{5}{6} \quad \frac{5}{6} \times 6$	Product is equal to $\frac{5}{6}$ . $5 \times \frac{4}{4} \times \frac{10}{6}$	Product is greater than $\frac{5}{6}$ . $2 \times \frac{5}{6} \times \frac{7}{3}$
Product is equal to $\frac{5}{6}$ . $5 \times \frac{4}{4} \times \frac{10}{6}$	Product is greater than $\frac{5}{6}$ . $2 \times \frac{5}{6} \times \frac{7}{3}$	Product is less than $\frac{5}{6}$ . $5 \times \frac{2}{3} \times \frac{5}{6}$

**5.** Stuart rode his bicycle  $6\frac{2}{3}$  miles on Friday. On Saturday he rode  $1\frac{1}{3}$  times as far as he rode on Friday. On Sunday he rode  $\frac{5}{6}$  times as far as he rode on Friday. Which statements are correct? Mark all that apply.

**A** Stuart rode more miles on Saturday than he rode on Friday.

**B** Stuart rode more miles on Friday than he rode on Saturday and Sunday combined.

**C** Stuart rode fewer miles on Sunday than he rode on Friday.

**D** Stuart rode more miles on Sunday than he rode on Saturday.

**6.** Write each multiplication expression in the correct box.

$\frac{2}{3} \times \frac{2}{3} \quad \frac{5}{6} \times \frac{2}{3} \quad 4 \frac{1}{8} \times \frac{2}{3} \quad \frac{4}{4} \times \frac{2}{3} \quad \frac{2}{3} \times 2 \quad \frac{2}{3} \times \frac{5}{5}$	Product is equal to $\frac{2}{3}$ . $4 \times \frac{2}{3} \times \frac{2}{3} \times 5$	Product is greater than $\frac{2}{3}$ . $4 \frac{1}{8} \times \frac{2}{3} \times 2$
Product is equal to $\frac{2}{3}$ . $4 \times \frac{2}{3} \times \frac{2}{3} \times 5$	Product is greater than $\frac{2}{3}$ . $4 \frac{1}{8} \times \frac{2}{3} \times 2$	Product is less than $\frac{2}{3}$ . $3 \times \frac{2}{3} \times \frac{5}{6} \times 2$





Name \_\_\_\_\_

**Practice Test**  
5.NF.B.6  
*Apply and extend previous understandings of multiplication and division to multiply and divide fractions.*

**Practice Test**

- Kayla walks  $3\frac{2}{5}$  miles each day. Which of the following statements correctly describe how far she walks? Mark all that apply.

A Kayla walks  $14\frac{2}{5}$  miles in 4 days.

B Kayla walks  $23\frac{4}{5}$  miles in 7 days.

C Kayla walks 34 miles in 10 days.

D Kayla walks  $102\frac{2}{5}$  miles in 31 days.
- The table shows how many hours some of the part-time employees at the toy store worked last week.

Name	Hours Worked
Conrad	$6\frac{2}{3}$
Giovanni	$9\frac{1}{2}$
Sally	$10\frac{3}{4}$

This week, Conrad will work  $1\frac{3}{4}$  times longer than last week. Giovanni will work  $1\frac{1}{3}$  times longer than last week. Sally will work  $\frac{5}{2}$  the number of hours she worked last week. Match each employee's name to the number of hours he or she will work this week.

**Employee**

Conrad

Giovanni

Sally

**Hours This Week**

$7\frac{1}{6}$

$12\frac{2}{3}$

$11\frac{2}{3}$
- Jake wrote 4 equations on the board. Which of Jake's equations are correct? Mark all that apply.

A  $\frac{3}{5} \times \frac{2}{7} = \frac{21}{10}$

B  $\frac{2}{9} \times \frac{5}{3} = \frac{10}{27}$

C  $\frac{7}{8} \times \frac{5}{9} = \frac{35}{72}$

D  $\frac{1}{2} \times \frac{3}{5} = \frac{4}{10}$

Getting Ready for High-Stakes Assessments  
© Houghton Mifflin Harcourt Publishing Company

**37**

**GO ON**

Practice Test

Name \_\_\_\_\_

**Practice Test**

**Practice Test**

- Jessica is creating a banner that will be  $\frac{2}{5}$  meter wide. Which statements correctly describe the area her banner will be for each length? Mark all that apply.

A  $\frac{2}{5}$ -meter-long banner will have an area of  $\frac{4}{25}$  meter squared.

B  $\frac{5}{8}$ -meter-long banner will have an area of  $\frac{10}{25}$  meter squared.

C  $\frac{3}{4}$ -meter-long banner will have an area of  $\frac{6}{20}$  meter squared.

D  $\frac{9}{10}$ -meter-long banner will have an area of  $\frac{18}{100}$  meter squared.
- The table shows how many bags of canned goods each class collected during the first week of a food drive.

Class	Bags of Canned Goods
4 <sup>th</sup> Graders	$3\frac{1}{2}$
5 <sup>th</sup> Graders	$2\frac{3}{4}$
6 <sup>th</sup> Graders	$3\frac{1}{4}$

Next week the 4<sup>th</sup> graders hope to collect  $1\frac{1}{3}$  times as many bags of canned goods as the first week. The 5<sup>th</sup> graders' goal is to collect  $1\frac{3}{4}$  times as many bags of canned goods as they collected in week 1. The 6<sup>th</sup> graders hope to collect  $1\frac{1}{2}$  times as many bags of canned goods. Match each class to the number of bags of canned goods they hope to collect next week.

**Class**

4<sup>th</sup> Graders

5<sup>th</sup> Graders

6<sup>th</sup> Graders

**Next Week's Goal (bags)**

$4\frac{13}{16}$

$4\frac{7}{8}$

$4\frac{2}{3}$

Getting Ready for High-Stakes Assessments  
© Houghton Mifflin Harcourt Publishing Company

**38**

**STOP**

Practice Test

**Practice Test**

**5.NF.B.7a**  
Apply and extend previous understandings of multiplication and division to multiply and divide fractions.

Name \_\_\_\_\_

1. A builder has an 8-acre plot divided into  $\frac{1}{4}$ -acre home sites. How many  $\frac{1}{4}$ -acre home sites are there?

There are  home sites.

2. For numbers 2a–2e, write the number that makes the equation correct.

2a.  $3 \div \frac{1}{4} =$

2b.   $\div \frac{1}{2} = 14$

2c.  $\frac{1}{5} \div 4 =$

2d.   $\div 5 = \frac{1}{10}$

2e.  $\frac{1}{7} \div 3 =$

3. Choose the numbers to create a story problem that represents  $4 \div \frac{1}{6}$ .

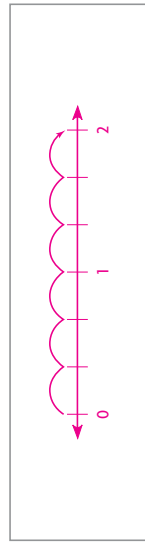
Bill bought  pound(s) of cheese.

He made grilled cheese sandwiches and used  pound(s) of cheese in each sandwich.

Bill made  sandwiches.

4. Divide. Draw a number line to show your work.

$2 \div \frac{1}{3} =$



**GO ON**

**Practice Test**

Name \_\_\_\_\_

5. Adan has  $\frac{1}{2}$  quart of milk. If he pours the same amount of milk into 3 glasses, each glass will contain  quart of milk.

6. Brendan made a loaf of bread. He gave equal portions of  $\frac{1}{2}$  of the loaf of bread to 6 friends. Which diagram could Brendon use to find the fraction of the loaf of bread that each friend received? Mark all that apply.

(A)

(D)

7. Landon and Colin bought  $\frac{1}{2}$  pound of strawberries. They are sharing the strawberries equally. Each person will receive  pound of strawberries.




Name \_\_\_\_\_

**Practice Test**

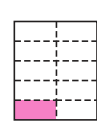
**5.NF.B.7b**  
*Apply and extend previous understandings of multiplication and division to multiply and divide fractions.*

1. Gabriel made 4 small meatloaves. He cut each meatloaf into fourths. How many  $\frac{1}{4}$ -size pieces of meatloaf does Gabriel have? Draw lines in the model to find the answer.



Gabriel has 16  $\frac{1}{4}$ -size pieces of meatloaf.


2. Camilla has a  $\frac{1}{2}$  pound of raisins that she will divide evenly into 5 bags. Shade the diagram to show the fractional part of a pound that will be in each bag.



3. A 6-mile walking trail has a distance marker every  $\frac{1}{3}$  mile. How many markers are along the trail?

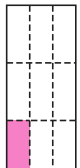
There are 18 markers along the trail.

4. Eric has 4 pieces of clay. He cut each piece of clay into thirds. How many  $\frac{1}{3}$ -size pieces of clay does Eric have? Draw lines in the model to find the answer.



Eric has 12  $\frac{1}{3}$ -size pieces of clay.

5. Cecilia has  $\frac{1}{3}$  pound of trail mix that she will divide equally into 3 bags. Shade the diagram to show the fractional part of a pound that will be in each bag.



**Getting Ready for High-Stakes Assessments**  
© Houghton Mifflin Harcourt Publishing Company

**41**


**GO ON**

Practice Test

Name \_\_\_\_\_


**Practice Test**

6. Adrian made 3 granola bars. He cut each bar into fourths. How many  $\frac{1}{4}$ -size pieces of granola bar does Adrian have? Draw lines in the model to find the answer.




Adrian has 12 one-quarter-size pieces of granola bar.


7. Kyle made a loaf of banana bread. He gave equal portions of  $\frac{1}{2}$  of the loaf to 4 friends. Which diagram could Kyle use to find the fraction of the loaf that each friend received? Mark all that apply.




●



●



●



●

8. Ben is making bread that calls for 5 cups of flour. His measuring cup only holds  $\frac{1}{2}$  cup. How many times will Ben need to fill the measuring cup to get the 5 cups of flour?

**Ben will need to fill the measuring cup 10 times.**

9. Tina has  $\frac{1}{2}$  quart of iced tea. She pours the same amount into each of 3 glasses. Which equation represents the fraction of a quart of iced tea that is in each glass? Mark all that apply.

● **(A)**  $\frac{1}{2} \div \frac{1}{3} = n$

● **(B)**  $2 \div 3 = n$

● **(C)**  $2 \div \frac{1}{3} = n$

● **(D)**  $2 \times \frac{1}{3} = n$

● **(E)**  $2 \times \frac{1}{3} = n$

**Getting Ready for High-Stakes Assessments**  
© Houghton Mifflin Harcourt Publishing Company

**42**

**STOP**

Practice Test

**Practice Test**

**5.NF.B.7c**

*Apply and extend previous understandings of multiplication and division to multiply and divide fractions.*

Name \_\_\_\_\_

- Maureen has  $\frac{1}{4}$  pound of raisins. She divides the raisins into 4 servings. Each serving contains  $\frac{1}{16}$  pound of raisins.
- A giant tortoise can walk about  $\frac{1}{10}$  meter per second on land. A cooter turtle can walk about  $\frac{1}{2}$  meter per second on land.

**Part A**

How long would it take a giant tortoise to travel 5 meters? Show your work.

$$5 \div \frac{1}{10} = 5 \times 10 = 50$$

**It would take the giant tortoise 50 seconds to travel 5 meters.**

**Part B**

How much longer would it take a giant tortoise than a cooter turtle to travel 10 meters on land? Explain how you found your answer.

**80 seconds longer; Possible explanation: First, I found the time it would take the giant tortoise to travel 10 meters:  $10 \div \frac{1}{10} = 10 \times 10 = 100$ , or 100 seconds. Then, I found the time it would take the cooter turtle to travel 10 meters:  $10 \div \frac{1}{2} = 10 \times 2 = 20$ , or 20 seconds. Then I subtracted  $100 - 20 = 80$ .**

- Dora buys one package each of 1-pound, 2-pound, and 4-pound packages of ground beef to make hamburgers.

How many  $\frac{1}{4}$ -pound hamburgers can she make? Show your work using words, pictures, or numbers.

**Check students' work. 28 hamburgers; Possible explanation: I found the total number of pounds of ground beef Dora bought:  $1 + 2 + 4 = 7$ . Then, I wrote a related multiplication expression to find  $7 \div \frac{1}{4} = 7 \times 4 = 28$**



**Practice Test**

Name \_\_\_\_\_

- Mrs. Green wrote the following problem on the whiteboard: Lisa and Frank shared  $\frac{1}{3}$  pound of cherries equally. What fractional part of a pound did each person receive?

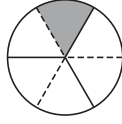
**Part A**

Molly wrote the following equation to solve the problem:  $2 \div \frac{1}{3} = n$ . Do you agree with Molly's equation? Support your answer with information from the problem.

**No, I disagree. Possible answer: Lisa and Frank are sharing  $\frac{1}{3}$  pound of cherries, and I need to divide  $\frac{1}{3}$  by 2, so the correct equation is  $\frac{1}{3} \div 2 = n$ .**

**Part B**

Noah drew this diagram to solve the problem. Can Noah use his diagram to find the fractional part of a pound of cherries that each person received? Support your answer with information from the problem.



**Yes. Possible answer: Noah divided the circle into 3 equal parts to represent thirds. Then, he divided each third in half. He shaded half of  $\frac{1}{3}$  of the circle. So, the diagram represents  $\frac{1}{3} \div 2 = \frac{1}{3} \times \frac{1}{2} = \frac{1}{6}$ . Since  $\frac{1}{6}$  of the circle is shaded, Lisa and Frank will each get  $\frac{1}{6}$  pound of cherries.**

- Kayleigh has  $\frac{1}{4}$ -cup of oil. She pours the same amount into each of 2 oil lamps. Which equation represents the fraction of a cup of oil that is in each oil lamp? Mark all that apply.

- A  $\frac{1}{2} \div 4 = n$
- B  $\frac{1}{4} \times 2 = n$
- C  $2 \div 4 = n$
- D  $4 \div 2 = n$
- E  $\frac{1}{4} \div 2 = n$
- F  $2 \times \frac{1}{4} = n$



**Practice Test**  
**5.MD.A.1**  
*Convert like measurement units within a given measurement system.*

Name \_\_\_\_\_

1. The library is 5 miles from the post office. How many yards is the library from the post office?  
**8,800** yards

2. Billy made 3 gallons of juice for a picnic. He said that he made  $\frac{3}{4}$  quart of juice. Explain Billy's mistake.

**Possible explanation: Billy divided the number of gallons by 4 to convert to quarts. He should have multiplied the number of gallons by 4 to find the number of quarts in 3 gallons.**  
 $3 \times 4 = 12$  quarts

3. The Drama Club is showing a video of its recent play. The first showing begins at 2:30 P.M. The second showing is scheduled at 5:25 P.M. with a  $\frac{1}{2}$ -hour break between the showings.

**Part A**

How long is the video in hours and minutes?  
**2** hours and **25** minutes

**Part B**

Explain how you can use a number line to find the answer.

**Possible explanation: I can work backward from the start time of the second showing at 5:25. I count back  $\frac{1}{2}$  hour, which is 30 minutes, for the break between showings to 4:55. Then, I can find the elapsed time between 2:30 and 4:55.**

**Part C**

The second showing started 20 minutes late. Will the second showing be over by 7:45 P.M.? Explain why your answer is reasonable.

**No. Possible explanation: The second showing started at 5:45 P.M. The movie lasts 2 hours 25 minutes, so it ends at 8:10 P.M., which is later than 7:45 P.M.**

**GO ON**

Practice Test

Getting Ready for High-Stakes Assessments  
© Houghton Mifflin Harcourt Publishing Company

45

**Practice Test**

Name \_\_\_\_\_

4. Fred bought 4 liters of liquid laundry detergent, 3,250 milliliters of fabric softener, and 2.5 liters of bleach. Which statements are true? Mark all that apply.

A Fred bought 75 milliliters more fabric softener than bleach.

B Fred bought 1.75 liters more laundry detergent than bleach.

C Fred bought 750 milliliters more fabric softener than bleach.

D Fred bought 150 milliliters more laundry detergent than bleach.

E Fred bought 0.75 liters more laundry detergent than fabric softener.

5. A male hippopotamus can weigh up to 10,000 pounds. How many tons is 10,000 pounds?  
**5** tons

6. Amar and his friends went to a movie at 4:45 P.M. The movie ended at 6:20 P.M.

**Part A**

How long was the movie?  
**1** hour(s) and **35** minutes

**Part B**

Amar got home 45 minutes after the movie ended. What time did Amar get home? Explain how you found your answer.

**7:05 P.M.; Possible explanation: I need to find 45 minutes after 6:20 P.M. 6:20 to 7:00 is 40 minutes, so 5 minutes more is 7:05.**

Practice Test

Getting Ready for High-Stakes Assessments  
© Houghton Mifflin Harcourt Publishing Company

46



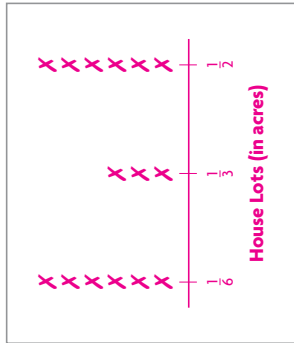
Practice Test

5.MD.B.2  
Represent and interpret data.

Name \_\_\_\_\_

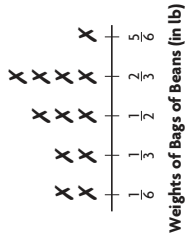
1. A builder is buying property to build new houses. The sizes of the lots are  $\frac{1}{6}$ ,  $\frac{1}{2}$ ,  $\frac{1}{3}$ ,  $\frac{1}{6}$ ,  $\frac{1}{2}$ ,  $\frac{1}{3}$ ,  $\frac{1}{6}$ ,  $\frac{1}{2}$ ,  $\frac{1}{3}$ ,  $\frac{1}{6}$ , and  $\frac{1}{3}$  acre. Organize the information in a line plot.

What is the average size of the lots?  
 $\frac{1}{3}$  \_\_\_\_\_ acre



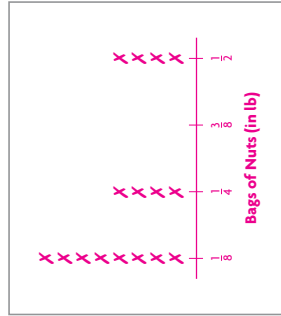
2. The line plot shows the weights of bags of beans. What is the average weight of the bags? Show your work.

$\frac{1}{2}$  pound;  
 $\frac{1}{6} \times 2 = \frac{2}{6}$  or  $\frac{1}{3}$ ;  $\frac{1}{3} \times 2 = \frac{2}{3}$ ;  $\frac{2}{3} \times 3 = \frac{2}{3} \times 3 = \frac{2}{3} \times 3 = 2$  or  $1\frac{1}{2}$   
 $\frac{2}{3} \times 4 = \frac{8}{3}$  or  $2\frac{2}{3}$ ;  $\frac{5}{6}$   
 $\frac{1}{3} + \frac{2}{3} + 1\frac{1}{2} + 2\frac{2}{3} + \frac{5}{6} = 6$   
 $6 \div 2 = \frac{1}{2}$



3. Amy filled bags with mixed nuts. The weights of the bags are  $\frac{1}{8}$ -lb,  $\frac{1}{4}$ -lb,  $\frac{1}{4}$ -lb,  $\frac{1}{8}$ -lb,  $\frac{1}{2}$ -lb,  $\frac{1}{8}$ -lb,  $\frac{1}{4}$ -lb,  $\frac{1}{8}$ -lb,  $\frac{1}{2}$ -lb,  $\frac{1}{8}$ -lb,  $\frac{1}{4}$ -lb,  $\frac{1}{8}$ -lb,  $\frac{1}{4}$ -lb,  $\frac{1}{8}$ -lb,  $\frac{1}{4}$ -lb, and  $\frac{1}{2}$ -lb. Organize the information in a line plot.

What is the average weight of the bags?  
 $\frac{1}{4}$  \_\_\_\_\_ pound(s)

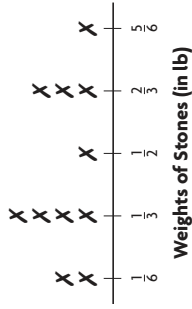


Practice Test

Name \_\_\_\_\_

4. The line plot shows the weights of stones found in a stream. What is the average weight of the stones? Show your work.

$\frac{5}{11}$  pound;  
 $\frac{1}{6} \times 2 = \frac{2}{6}$  or  $\frac{1}{3}$ ;  $\frac{1}{3} \times 4 = \frac{4}{3}$  or  $1\frac{1}{3}$ ;  $\frac{2}{3} \times 3 = \frac{2}{3} \times 3 = 2$  or  $2$ ;  $\frac{5}{6}$   
 $\frac{1}{3} + 1\frac{1}{3} + 2 + 2 + \frac{5}{6} = 5$   
 $5 \div 11 = \frac{5}{11}$

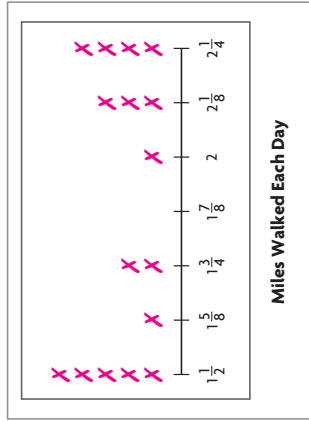


5. Mika records the number of miles she walks each day.

Part A

Graph Mika's results on the line plot.

Distance (miles)	Days
$1\frac{1}{2}$	
$1\frac{5}{8}$	
$1\frac{3}{4}$	
2	
$2\frac{1}{8}$	
$2\frac{1}{4}$	



Part B

How many days did she walk and what was her total distance? Explain your thinking.

16 days for a total of 30 miles; Possible explanation: I multiplied each distance by the number of dots above the distance in the line plot, and then I added the products.







**Practice Test**  
5.MD.C.3a  
*geometric measurement; understand concepts of volume and relate volume to multiplication and to addition.*

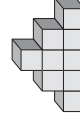
**GO ON**

Name \_\_\_\_\_

1. Match the figure with the number of unit cubes that would be needed to build each figure. Not every number of unit cubes will be used.










- 8 unit cubes
- 9 unit cubes
- 10 unit cubes
- 11 unit cubes
- 12 unit cubes
- 16 unit cubes

2. Match the figure with the number of unit cubes that would be needed to build each figure. Not every number of unit cubes will be used.

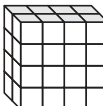






- 6 unit cubes
- 7 unit cubes
- 8 unit cubes
- 9 unit cubes
- 10 unit cubes
- 12 unit cubes

3. Bakari builds a rectangular prism using unit cubes.



What is the volume of the prism? Explain your thinking.

**32 cubic units; Possible explanation: There are 8 unit cubes on the bottom layer. Since there are 4 layers that each have 8 unit cubes, I multiplied 4 by 8 to get 32.**

Getting Ready for High-Stakes Assessments  
© Houghton Mifflin Harcourt Publishing Company

49

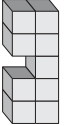
Practice Test


**Practice Test**


**STOP**

Name \_\_\_\_\_

4. Match the figure with the number of unit cubes that would be needed to build each figure. Not every number of unit cubes will be used.

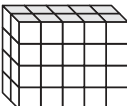






- 7 unit cubes
- 8 unit cubes
- 9 unit cubes
- 10 unit cubes
- 12 unit cubes
- 15 unit cubes

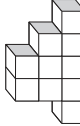
5. Joo-Chan builds a rectangular prism using unit cubes.

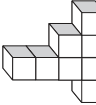


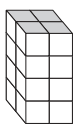
What is the volume of the prism? Explain your thinking.

**40 cubic units; Possible explanation: There are 8 unit cubes on the bottom layer. Since there are 5 layers each with 8 unit cubes, I multiplied 5 by 8 to get 40.**

6. Match the figure with the number of unit cubes that would be needed to build each figure. Not every number of unit cubes will be used.







- 8 unit cubes
- 9 unit cubes
- 10 unit cubes
- 11 unit cubes
- 12 unit cubes
- 16 unit cubes

Getting Ready for High-Stakes Assessments  
© Houghton Mifflin Harcourt Publishing Company

50

Practice Test

Practice Test

5.MD.C.3b

Geometric measurement; understand concepts of volume and relate volume to multiplication and to addition.

Name \_\_\_\_\_

1. A shipping crate holds 20 shoeboxes. The dimensions of a shoebox are 6 inches by 4 inches by 12 inches. For numbers 1a–1c, write the number that makes the sentence true.

1a. Each shoebox has a volume of  cubic inches.

1b. Each crate has a volume of about  cubic inches.

1c. If the crate could hold 27 shoeboxes, the volume of the crate would be about  cubic inches.

2. A pack of folders has a length of 5 inches, a width of 12 inches, and a height of 1 inch. The pack of folders will be shipped in a box that holds 12 packs of folders. Which statements are true? Mark all that apply.

Each pack of folders has a volume of 60 cubic inches.

The box has a volume of about 720 cubic inches.

C If the box held 15 packs of folders, it would have a volume of about 1,200 cubic inches.

If the box held 20 packs of folders, it would have a volume of about 1,200 cubic inches.

3. A shipping crate holds 18 books. The dimensions of each book are 2 inches by 8 inches by 10 inches. For numbers 3a–3b, choose the number that makes the statement true.

3a. Each book has a volume of   cubic inches.  
 160

3b. Each crate has a volume of about  cubic inches.  
 2,880



51

Getting Ready for High-Stakes Assessments  
© Houghton Mifflin Harcourt Publishing Company

Practice Test

Practice Test

Name \_\_\_\_\_

4. A shipping container holds 40 tissue boxes. The dimensions of a tissue box are 4 inches by 6 inches by 3 inches. Which statements are true? Mark all that apply.

Each tissue box has a volume of 72 cubic inches.

B Each container has a volume of about 1,440 cubic inches.

C If a container could hold 48 tissue boxes, the volume of the container would be about 624 cubic inches.

If a container has a volume of 3,000 cubic inches, 41 tissue boxes will fit in the container.

5. A shipping container holds 40 gift boxes. The dimensions of a gift box are 4 inches by 5 inches by 2 inches. For numbers 5a–5c, choose the number that makes the statement true.

5a. Each gift box has a volume of    cubic inches.

5b. Each container has a volume of about    cubic inches.

5c. If a container could hold 50 tissue boxes, the volume of the container would be about    cubic inches.

6. Miranda has cubes that measure 4 inches on each side. Which statements are true? Mark all that apply.

A The volume of one cube is 48 cubic inches.

If Miranda fills a box with 12 cubes, the volume of the box is about 768 cubic inches.

C If the volume of the box is 800 cubic inches, Miranda can fit 14 cubes in the box.

If the volume of the box is 1,000 cubes, Miranda can fit 15 cubes in the box.

52

Getting Ready for High-Stakes Assessments  
© Houghton Mifflin Harcourt Publishing Company

Practice Test

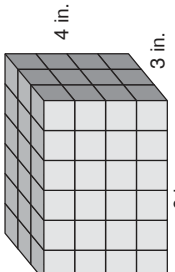


Practice Test

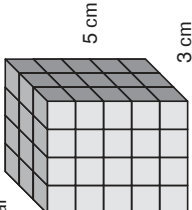
**5.MD.C.4**  
*geometric measurement; understand concepts of volume and relate volume to multiplication and to addition.*

Name \_\_\_\_\_

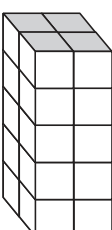
1. Victoria used 1-inch cubes to build the rectangular prism shown. Find the volume of the rectangular prism Victoria built.  
**72** cubic inches



2. Carlton used 1-centimeter cubes to build the rectangular prism shown. Find the volume of the rectangular prism Carlton built.  
**60** cubic inches




3. Ryan built a rectangular prism out of cubes.



**Part A**  
Find the volume of the prism.  
 **$5 \times 2 \times 2 = 20$  cubic units**

**Part B**  
Ryan added 4 cubes to his prism. Calculate the volume. How has the volume changed?  
 **$20 + 4 = 24$  cubic units; Possible explanation: The volume increased by 4.**

**GO ON** 

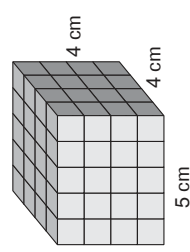
Getting Ready for High-Stakes Assessments  
© Houghton Mifflin Harcourt Publishing Company

53 Practice Test

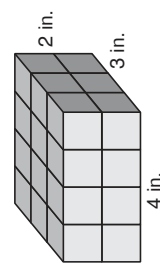
Practice Test

Name \_\_\_\_\_

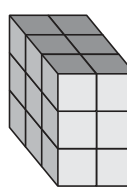
4. Wendy used 1-centimeter cubes to build the rectangular prism shown. Find the volume of the rectangular prism Wendy built.  
**80** cubic centimeters



5. Carmen used 1-inch cubes to build the rectangular prism shown. Find the volume of the rectangular prism Carmen built.  
**24** cubic inches



6. Julio built a rectangular prism out of cubes.



**Part A**  
Find the volume of the prism.  
 **$3 \times 3 \times 2 = 18$  cubic units**

**Part B**  
Julio added 6 cubes to his prism. Calculate the volume. How has the volume changed?  
 **$18 + 6 = 24$  cubic units; Possible explanation: The volume increased by 6.**

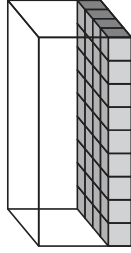
Getting Ready for High-Stakes Assessments  
© Houghton Mifflin Harcourt Publishing Company

54 Practice Test

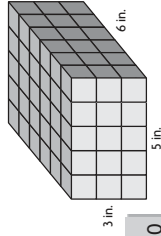
Practice Test

Name \_\_\_\_\_

4. Jessica packed 1-inch cubes into a box with a volume of 144 cubic inches. How many layers of 1-inch cubes did Jessica pack?



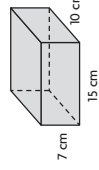
\_\_\_\_\_ layers



- 1 3 5 6 14 30 90 120

5. Donald used 1-inch cubes to make the rectangular prism shown. For numbers 5a-5d, write the value that makes each statement true. Each value can be used more than once or not at all.

- 5a. Each cube has a volume of 1 cubic inch(es).  
 5b. Each layer of the prism is made up of 30 cubes.  
 5c. There are 3 layers of cubes.  
 5d. The volume of the prism is 90 cubic inches.



6. Manuel stores his favorite CDs in a box like the one shown.

Use the numbers and symbols on the tiles to write a formula that represents the volume of the box. Symbols may be used more than once or not at all.

V 7 10 15 = + × ÷

$V = 15 \times 10 \times 7$

What is the volume of the box? 1,050 cubic centimeters

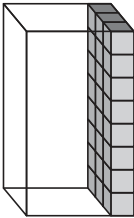


Practice Test

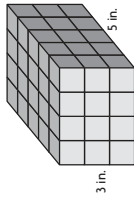
5.MD.C.5a  
 Geometric measurement: understand concepts of volume and relate volume to multiplication and to addition.

Name \_\_\_\_\_

1. Mark packed 1-inch cubes into a box with a volume of 120 cubic inches. How many layers of 1-inch cubes did Mark pack?



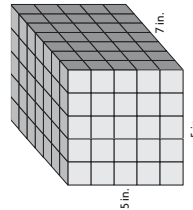
\_\_\_\_\_ layers



- 1 3 4 5 12 15 20 60

2. Monica used 1-inch cubes to make the rectangular prism shown. For numbers 2a-2d, write the value from the tiles that makes each statement true. Each value can be used more than once or not at all.

- 2a. Each cube has a volume of 1 cubic inch(es).  
 2b. Each layer of the prism is made up of 20 cubes.  
 2c. There are 3 layers of cubes.  
 2d. The volume of the prism is 60 cubic inches.



3. John used 1-inch cubes to make the rectangular prism shown. For numbers 3a-3d, write the value that makes each statement correct. Each value can be used more than once or not at all.

- 1 3 5 7 12 35 125 175

- 3a. Each cube has a volume of 1 cubic inch(es).  
 3b. Each layer of the prism is made up of 35 cubes.  
 3c. There are 5 layers of cubes.  
 3d. The volume of the prism is 175 cubic inches.

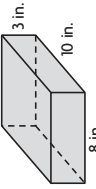


Name \_\_\_\_\_

**Practice Test**

**5.MD.C.5b**  
*geometric measurement; understand concepts of volume and relate volume to multiplication and to addition.*

1. Jose stores his baseball cards in a box like the one shown.



Use the numbers and symbols on the tiles to write a formula that represents the volume of the box. Symbols may be used more than once or not at all.

V

3

8

10

=

+

×

-

÷

$V = 8 \times 10 \times 3$

What is the volume of the box? **240** cubic inches

2. Megan's aquarium has a volume of 4,320 cubic inches. Which could be the dimensions of the aquarium? Mark all that apply.

A 16 in. by 16 in. by 18 in.

B 14 in. by 18 in. by 20 in.

C 12 in. by 15 in. by 24 in.

D 8 in. by 20 in. by 27 in.

3. Ken keeps paper clips in a box that is the shape of a cube. Each side of the cube is 3 inches. What is the volume of the box?

**27** cubic inches

4. Tom keeps sticky notes in a box that is the shape of a cube. The box has a base of 16 square inches and a height of 4 inches. What is the volume of the box?

**64** cubic inches

**Getting Ready for High-Stakes Assessments**  
© Houghton Mifflin Harcourt Publishing Company

**57**

**GO ON**

**Practice Test**

Name \_\_\_\_\_

**Practice Test**

5. Dakota's wading pool has a volume of 8,640 cubic inches. If her pool is a rectangular prism, which could be the dimensions of the wading pool? Mark all that apply.

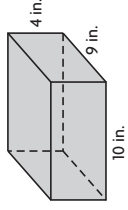
A Base: 360 square inches; Height: 24 inches

B Base: 320 square inches; Height: 27 inches

C Base: 403 square inches; Height: 28 inches

D Base: 629 square inches; Height: 30 inches

6. Erin stores her photos in boxes like the one shown.



Use the numbers and symbols on the tiles to write a formula that represents the volume of one box. Symbols may be used more than once or not at all.

V

4

9

10

=

+

×

-

÷

$V = 10 \times 9 \times 4$

What is the combined volume of two boxes?

**720** cubic inches

7. A shipping container has a volume of 2,880 cubic inches. Which could be the dimensions of the container? Mark all that apply.

A 10 in. by 12 in. by 24 in.

B 12 in. by 12 in. by 20 in.

C 12 in. by 15 in. by 18 in.

D 10 in. by 16 in. by 20 in.

**Getting Ready for High-Stakes Assessments**  
© Houghton Mifflin Harcourt Publishing Company

**58**

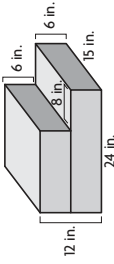
**STOP**

**Practice Test**

Practice Test

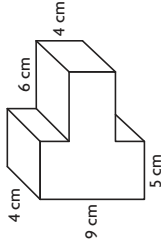
Name \_\_\_\_\_

4. Diane places 2 drawers with the same width and height on top of each other. What is the combined volume of the 2 drawers?



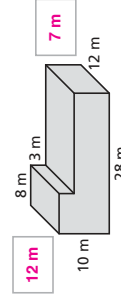
**3,600** cubic inches

5. Tomas makes a letter T using 2 foam blocks. What is the volume of the shape Tomas makes?



Volume = **276** cubic centimeters

6. The stage at a stadium is built to have a second level for a drum set. Harvey wants to find the combined volume of the 2 rectangular prisms that make up the stage. First write the lengths of the 2 missing dimensions. Then use a formula and calculate the volume of the stage.



**2,640 cubic meters; Possible equation:  $V = 8 \times 12 \times 10 + 20 \times 12 \times 7$**



Practice Test

60

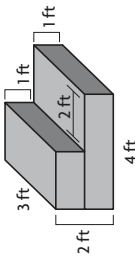
Getting Ready for High-Stakes Assessments  
© Houghton Mifflin Harcourt Publishing Company

Practice Test

**5.MD.C.5c**  
*geometric measurement; understand concepts of volume and relate volume to multiplication and to addition.*

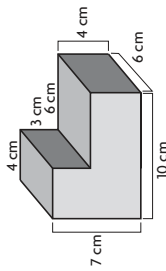
Name \_\_\_\_\_

1. Jason builds steps using 2 pieces of wood with the same height and width but different lengths. What is the volume of the steps he builds?



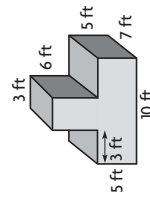
**18** cubic feet

2. Fabio glues 2 rectangular blocks together to make a model chair for a doll house. What is the volume of the model?



Volume = **312** cubic centimeters

3. Amelia stacks a moving box on top of a larger box. Both boxes have the same width. What is the combined volume of the boxes?



Volume = **476** cubic feet



Practice Test

59

Getting Ready for High-Stakes Assessments  
© Houghton Mifflin Harcourt Publishing Company

**Practice Test**  
5.G.A.1  
Graph points on the coordinate plane to solve real-world and mathematical problems.

**Golf Course**

**Practice Test**  
GO ON

Name \_\_\_\_\_

- The letters on the coordinate grid represent the locations of the first four holes on a golf course. Which of the following accurately describes the location of a hole? Mark all that apply.
  - A Hole U is 4 units left and 4 units down from hole S.
  - B Hole F is 1 unit right and 7 units down from hole U.
  - C Hole T is 2 units left and 4 units up from hole S.
  - D Hole S is 3 units left and 5 units up from hole F.
- Lindsey made a map of her town. Match each location below with the correct ordered pair that marks it on the coordinate grid. Not every ordered pair will be used.
 

Clock Tower	(4, 4)
Art Museum	(4, 1)
East Park	(1, 3)
Movie Theater	(5, 4)
School	(4, 5)
	(3, 1)
	(2, 4)
	(1, 4)
	(4, 2)
- Lucy's house is located at the point shown on the coordinate grid. Ainsley's house is located 2 units right and 3 units down from Lucy's house. Plot a point on the coordinate grid to represent the location of Ainsley's house.
 

What ordered pair represents the location of Lucy's house? (3, 5)

What ordered pair represents the location of Ainsley's house? (5, 2)

**Practice Test**

5.G.A.1  
Graph points on the coordinate plane to solve real-world and mathematical problems.

**AMUSEMENT PARK**

**Practice Test**

Name \_\_\_\_\_

- The map shows the locations of attractions at an amusement park. Match each location below with the correct ordered pair that marks it on the map. Not every ordered pair will be used.
 

Ferris Wheel	(0, 4)
Swimming Pool	(2, 4)
Roller Coaster	(4, 3)
Petting Zoo	(4, 0)
Water Slide	(4, 2)
	(3, 4)
	(1, 2)
- Luke's house is located at the point shown on the coordinate grid. Kyle's house is located 4 units left and 2 units up from Luke's house. Plot a point on the coordinate grid to represent the location of Kyle's house.
 

What ordered pair represents the location of Luke's house? (5, 3)

What ordered pair represents the location of Kyle's house? (1, 5)
- The coordinate grid represents the school playground. Which of the following accurately describes the location of a playground area? Mark all that apply.
  - A The slide is 2 units left and 4 units up from the soccer field.
  - B The baseball field is 1 unit left and 3 units down from the slide.
  - C The jungle gym is 4 units right and 1 unit down from the baseball field.
  - D The soccer field is 3 units right and 1 unit up from the baseball field.

**Practice Test**

5.G.A.1  
Graph points on the coordinate plane to solve real-world and mathematical problems.

**Playground**

**Practice Test**

Name \_\_\_\_\_

**Practice Test**

5.G.A.1  
Graph points on the coordinate plane to solve real-world and mathematical problems.

**Golf Course**

**Practice Test**

Name \_\_\_\_\_

- The letters on the coordinate grid represent the locations of the first four holes on a golf course. Which of the following accurately describes the location of a hole? Mark all that apply.
  - A Hole U is 4 units left and 4 units down from hole S.
  - B Hole F is 1 unit right and 7 units down from hole U.
  - C Hole T is 2 units left and 4 units up from hole S.
  - D Hole S is 3 units left and 5 units up from hole F.
- Lindsey made a map of her town. Match each location below with the correct ordered pair that marks it on the coordinate grid. Not every ordered pair will be used.
 

Clock Tower	(4, 4)
Art Museum	(4, 1)
East Park	(1, 3)
Movie Theater	(5, 4)
School	(4, 5)
	(3, 1)
	(2, 4)
	(1, 4)
	(4, 2)
- Lucy's house is located at the point shown on the coordinate grid. Ainsley's house is located 2 units right and 3 units down from Lucy's house. Plot a point on the coordinate grid to represent the location of Ainsley's house.
 

What ordered pair represents the location of Lucy's house? (3, 5)

What ordered pair represents the location of Ainsley's house? (5, 2)

**Practice Test**

5.G.A.1  
Graph points on the coordinate plane to solve real-world and mathematical problems.

**AMUSEMENT PARK**

**Practice Test**

Name \_\_\_\_\_

- The map shows the locations of attractions at an amusement park. Match each location below with the correct ordered pair that marks it on the map. Not every ordered pair will be used.
 

Ferris Wheel	(0, 4)
Swimming Pool	(2, 4)
Roller Coaster	(4, 3)
Petting Zoo	(4, 0)
Water Slide	(4, 2)
	(3, 4)
	(1, 2)
- Luke's house is located at the point shown on the coordinate grid. Kyle's house is located 4 units left and 2 units up from Luke's house. Plot a point on the coordinate grid to represent the location of Kyle's house.
 

What ordered pair represents the location of Luke's house? (5, 3)

What ordered pair represents the location of Kyle's house? (1, 5)
- The coordinate grid represents the school playground. Which of the following accurately describes the location of a playground area? Mark all that apply.
  - A The slide is 2 units left and 4 units up from the soccer field.
  - B The baseball field is 1 unit left and 3 units down from the slide.
  - C The jungle gym is 4 units right and 1 unit down from the baseball field.
  - D The soccer field is 3 units right and 1 unit up from the baseball field.

**Practice Test**

5.G.A.1  
Graph points on the coordinate plane to solve real-world and mathematical problems.

**Playground**

**Practice Test**

Name \_\_\_\_\_

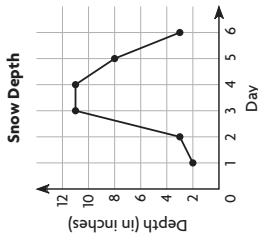


**Practice Test**

5.G.A.2  
Graph points on the coordinate plane to solve real-world and mathematical problems.

Name \_\_\_\_\_

1. For 6 days in a row, Julia measured the depth of the snow in a shaded area of her backyard. The line graph shows her data. Between which two days did the depth of the snow decrease the most?



between Day **5** and Day **6**

2. The table shows how much a puppy weighs from the age of 1 month old to the age of 5 months old.

Puppy's Weight	
Age (in months)	1 2 3 4 5
Weight (in pounds)	12 18 23 31 34

What ordered pairs would you plot to show the puppy's weight on a coordinate grid? How do you think the ordered pairs would be different if the puppy's weight was measured every week instead of every month? Explain your reasoning.

**(1, 12), (2, 18), (3, 23), (4, 31), (5, 34); Possible answer: There would be many more ordered pairs since there would be several weight measurements per month. Also, the puppy's weight would not increase as fast since it would not gain as much weight in a week as it does in a month.**

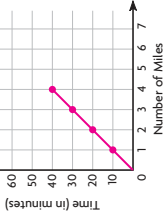


**Practice Test**

Name \_\_\_\_\_

3. Randy is training for a race. She makes a table that shows how long it takes her to run different distances.

Running Time and Distance	
Number of Miles	1 2 3 4
Time (in minutes)	10 20 30 40



**Part A**

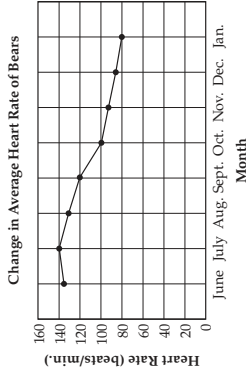
Write the number pairs as ordered pairs. Then write the rule to describe how the number pairs are related.

**(1, 10), (2, 20), (3, 30), (4, 40); Rule: Multiply the number of miles by 10.**

**Part B**

Graph the ordered pairs on the coordinate plane.

4. A scientist made a line graph that shows how a bear's average heart rate changes over time.



For numbers 4a–4b, choose the word that completes the statement.

- 4a. The bear's heart rate is at its highest in **July**, **October**, or **January**.

4b. The bear's heart rate **increases** from July to August, **decreases** from July to August, or **stays the same**.





Name \_\_\_\_\_

**Practice Test**  
5.G.B.3  
*Classify two-dimensional figures into categories based on their properties.*

1. Mr. Delgado sees this sign while he is driving. For numbers 1a–1b, choose the values and term that correctly describe the shape Mr. Delgado saw.

3

4

5

1a. The figure has \_\_\_\_\_ sides and \_\_\_\_\_ vertices.

0

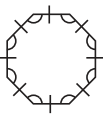
2

3

1b. All of the sides are congruent, so the figure is \_\_\_\_\_.

not a polygon  
a regular polygon  
 not a regular polygon

2. Javier drew the shape shown. For numbers 2a–2b, choose the values and term that correctly describe the shape Javier drew.



2a. The figure has \_\_\_\_\_ sides and \_\_\_\_\_ angles.

6

7

8

2b. The figure is a \_\_\_\_\_.

regular octagon  
 regular heptagon  
 regular quadrilateral

3. For numbers 3a–3c, write the name of one quadrilateral from the tiles to complete a true statement. Use each quadrilateral only once.

square

trapezoid

rectangle

3a. A rectangle is always a parallelogram.

3b. A square is always a rhombus.

3c. A trapezoid is sometimes a parallelogram.

**Getting Ready for High-Stakes Assessments**  
© Houghton Mifflin Harcourt Publishing Company

**65**

**GO ON**

**Practice Test**

Name \_\_\_\_\_

**Practice Test**

4. Mario is making a diagram that shows the relationship between different kinds of quadrilaterals. In the diagram, each quadrilateral on a lower level can also be described by the quadrilateral(s) above it on higher levels.

**Part A**

Complete the diagram by writing the name of one figure from the tiles in each box. Not every figure will be used.

quadrilateral

trapezoid

parallelogram

rhombus

square

trapezoid

triangle

rhombus

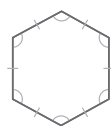
parallelogram

**Part B**

Mario claims that a rhombus is *sometimes* a square, but a square is *always* a rhombus. Is he correct? Explain your answer.

**Yes; Possible explanation: A square has 4 sides that are congruent and equal. A square with these features is also a rhombus. However, when a rhombus does not have 90 degree angles, it is not a square.**

5. Kayla drew the shape shown. For numbers 5a–5b, choose the values and term that correctly describe the shape Kayla drew.



5a. The figure has \_\_\_\_\_ sides and \_\_\_\_\_ angles.

4

6

8

5b. The figure is a \_\_\_\_\_.

regular heptagon  
 regular pentagon  
regular hexagon

**Getting Ready for High-Stakes Assessments**  
© Houghton Mifflin Harcourt Publishing Company

**66**

**STOP**

**Practice Test**

**Practice Test**

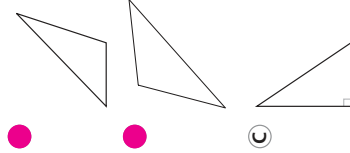
**5.G.B.4**  
Classify two-dimensional figures into categories based on their properties.

Name \_\_\_\_\_

1. Fran drew a triangle with no congruent sides and 1 right angle. Which term accurately describes the triangle? Mark all that apply.

- (A) isosceles  
 (B) scalene  
 (C) acute  
 (D) right

2. Nathan drew a design with scalene, obtuse triangles. Which figures could be the triangles Nathan drew? Mark all that apply.



3. Kelly drew a triangle with exactly 2 congruent sides and 3 acute angles. Which of the following accurately describes the triangle? Mark all that apply.

- (A) isosceles  
 (B) acute  
 (C) obtuse  
 (D) equilateral



67

Getting Ready for High-Stakes Assessments  
© Houghton Mifflin Harcourt Publishing Company

Practice Test

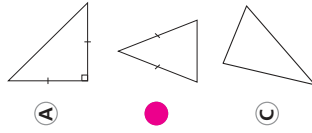
**Practice Test**

Name \_\_\_\_\_

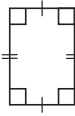
4. Kristin drew a triangle with 2 congruent sides and 1 obtuse angle. Which term accurately describes the triangle? Mark all that apply.

- (A) isosceles  
 (B) scalene  
 (C) acute  
 (D) obtuse

5. Natalie drew an acute, isosceles triangle. Which figure could be Natalie's triangle?



6. Which names apply to the polygon? Mark all that apply.



- (A) quadrilateral  
 (B) rectangle  
 (C) square  
 (D) parallelogram  
 (E) rhombus  
 (F) trapezoid



68

Getting Ready for High-Stakes Assessments  
© Houghton Mifflin Harcourt Publishing Company

Practice Test